

**SSC PUBLIC EXAMINATIONS; JUNE – 2021**

**SOCIAL STUDIES – PAPER – I & II**

**MODEL PAPER -5**

**(ENGLISH MIDEUM)**

---

**Time: 3.00**

**Max. Marks: 100**

---

**Instructions:**

- 1. 15 Minutes are allotted for reading the question paper in addition in 3.00 hours for writing the answers**
  - 2. All answers should be written in the separate answer booklet.**
  - 3. There are four sections in the question paper.**
  - 4. There is internal choice in Section – IV.**
- 

**SECTION – 1**

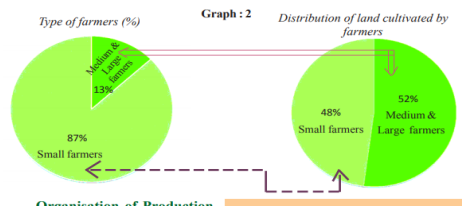
**12X1=12**

**Note:**

- I. If any question is answered more than once in this section. The earlier answer will only be considered.**
- II. Answer all the questions.**
- III. Each question carries 1 mark.**

- 1. Indian population as per 2011 Census.**  
A) 1028 million B) 3287 million C) 1210 million D) 20 million
- 2. Which is not correct of the following?**
  - A) Early humans are Nomadic**
  - B) In India 350million people live in cities and Towns.**
  - C) Chennai is a Mega city.**
  - D) Hyderabad is a Metropolitan city**

3. Kopi means?
4. What kind of Electricity is generating by Kudankulam Power Project?
5. Based on the first pair fill the second one.  
Human Development Report: UNDP  
Per Capita Income:-----
6. What the Pie chart denotes?



7. Arrange in chronological order.
  - A) League of Nations formed
  - B) Russian Revolution
  - C) First World War
  - D) Second World War
8. What does the term Genocide mean?
9. Which country invaded Vietnam in 1940?
10. Who is the first President of India?
11. Locate the Eastern Ghats in Indian map.



12. Expand the term AIADMK.

## SECTION – II

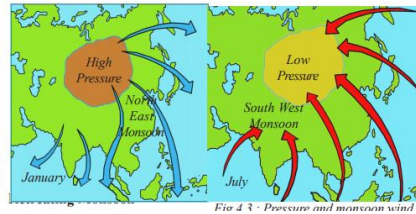
### 1. Answer all the questions

2. Each question carries 2 marks.

8X2 = 16

13. Indo Gangitic Plains have high Density of Population. Find reasons?

14. Observe the map and write tow words about it.



15. “Globalization by connecting countries results in greater competition among producing”. Justify the statement.

16. What elements do you incorporate while preparing a pamphlet on food security?

17. What was the “enabling act”?

18. Write about ‘Long March’.

19. Convert the information into pie chart.

Type of farmers	Percentage of cultivate area
Small farmers	48%
Medium and large farmers	52%

20. What is the purpose of Loak Adalat?

### SECTION – III

21. What are the factors which influence those Climatic conditions of India?

22. What are the different problems that are being faced by the laborer who migrates from rural to urban areas?

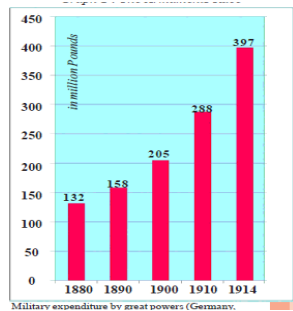
23. Look at table given below and answer the questions.

Sector	Contribution (% to total)	
	Employment	Gross Domestic Product
Organized	8	50
Unorganized	92	50

Total	100	100
-------	-----	-----

Questions:

1. What percentage of labour in the unorganized sector gets employment?
  2. Which sector gets decent job security?
24. Read the text given below and write your own opinion.
25. **Observe the graph given below and answer the questions**



Questions:

1. What does the above graph reveal?
  2. In which year the armaments mostly prepared?
  3. Why did the military expenditure increase for every 10 years?
  4. What are the countries that spend more money on weapons?
26. What are the different roles done by United Nations in order to build peace in the world?
27. Write about basic principles of Indian Constitution.
28. Right to Information Act resembles the true spirit of Democracy. How do you justify the statement?

SECTION – IV

29. Which are the major physiographic divisions of India? Contrast the relief of the Himalayan region with that of the Peninsular Plateau.

(or)

What are the advantages and disadvantages of Multinational Companies?

30. River Tungabhadra has different conflicts in the use of water. Comment on it.

(or)

“Public Distribution System can ensure better food security for people”. Explain the food security system.

31. Observe the following Climo graphs and

(or)

Study the table given below and answer the following questions.

Workers	Ploughing	Sowing	weeding	Transplanting	Harvesting	Winnowing	Threshing	Picking cotton
Male	214	197	215	--- ---	164	168	152	--- --
Female	---- - ---	152	130	143	126	124	118	136

Questions:

- i. What are the workers done only male workers?
  - ii. What are the works done only female workers?
  - iii. In which works, the wages are different for male and female?
  - iv. What are the reasons for paying less wages to female workers than male workers?
32. Integration of various princely states into the new Indian Nation was a challenge task. Discuss.

(or)

Coalition governments are responsible for the political instability.

Write your comment.

33. Locate the following on the outline map of India.

(A) K2 (Godwin Austin)

(B) Jaisalmer

(C) Malva plateau.

(D) Kaveri River.

(or)

Mark the two colonies of Asia and two colonies of African countries ruled by British.