

**SSC PUBLIC EXAMINATION
SOCIAL STUDIES PAPER 1 & 2
MODEL PAPER - 2**

TIME : 3 Hrs

MAX MARKS : 100

SECTION - 1

1. Answer all the questions.

12X1=12

2. Each question carries 1 mark.

1. What is the time difference between IST & GMT?
2. What are Duns? Give examples.
3. What does GDP mean?
4. Who formulated the three principles of 'San Min Chui'

1.Sun-Yat-Sen	Nationalism, Democracy and Socialism
2.Chaing Kaishek	Militarised the nation

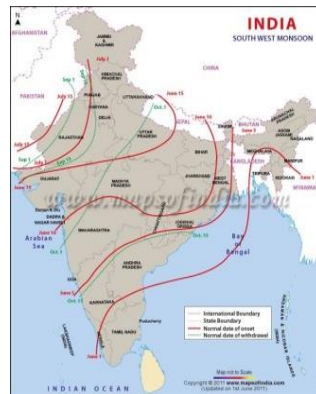
5. Who called the 20th century as The Age of Extremes?
6. Who introduced five-year plans in Russia?

(a) Lenin (b) Stalin (c) Gorbachev (d) Putin

7. He is known as the founder of Chip - co movement?

- I. Sundarlalbahuguna
- II. Swamy Viswanathan

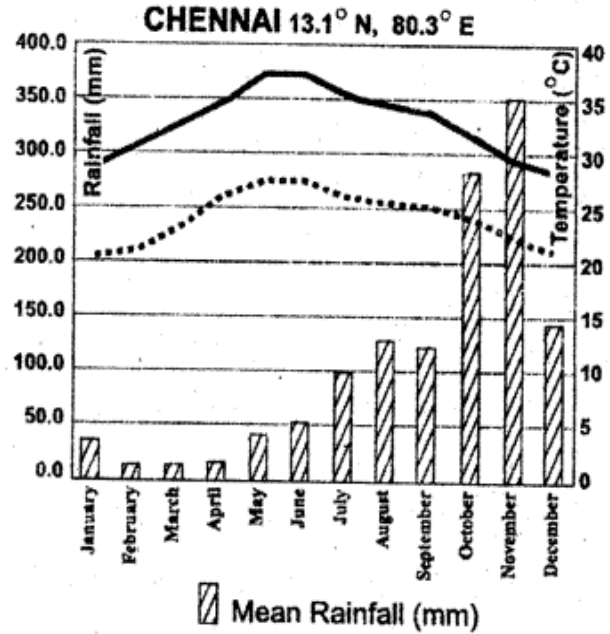
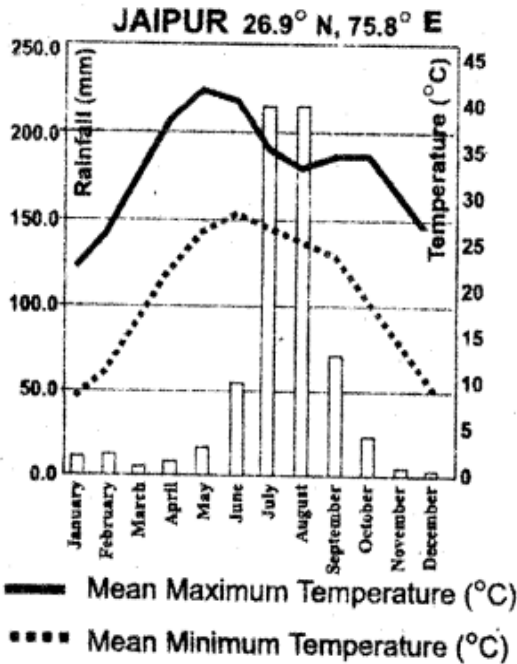
8. Study the map and answer the question.



Question: In which state south-west monsoon enter first?

9. Which policy was adopted by British?

10. When did our constitution come into force?
11. Give examples of the criterion for the measurement of human development?
12. Read the Graphs given below and answer the question.



Question: Which of the two cities experience lowest rainfall from the below graph?

SECTION - II

1. Answer all the questions.

8X2=16

2. Each question carries 2 marks.

13. Which one would be considered as seasonal migration?
 - a) Women moving from their parent's house to husband's house due to marriage.
 - b) Turmeric harvesters moving to one district to another district for 3 months in a year.
 - c) Cycle Rickshaw pullers in Delhi coming from rural parts of Bihar for 6 months in a year.
 - d) Women from Nalgonda district come to work as domestic maids in Hyderabad.
14. Land is also required for production of goods in urban area. in what ways is the use of land Different from rural area.
15. What are the aims of 42nd constitutional amendment?
16. What do you understand by welfare state?
17. Constitution of India begins with the statement "We the people of India" Do you think it Refelected the idea of the people of Nation?
18. Locate the following places on Indian physical map.

Simla, Mussorie,



19. What are the activities taken up in Hiware Bazaar?
20. Appreciate the principles of secularistic values incorporated in Indian Constitution?

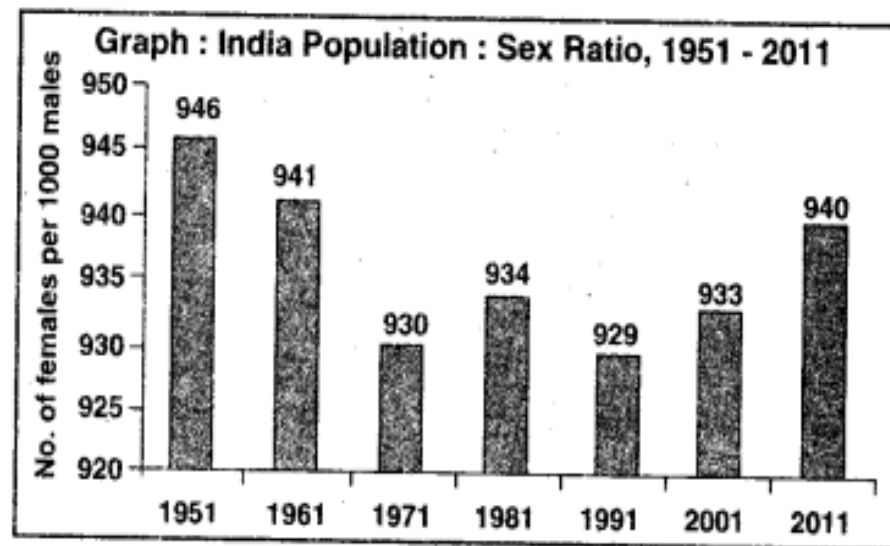
SECTION - III

1. Answer all the questions.

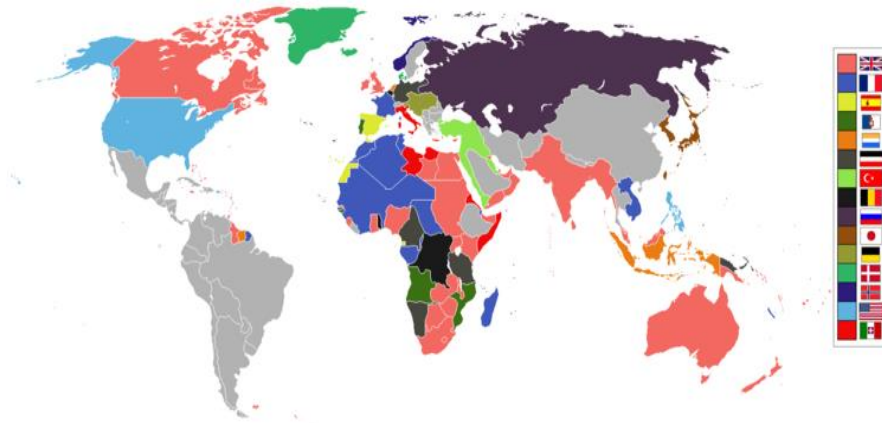
8X4=32

2. Each question carries 4 marks.

21. What are the differences between organized and unorganized sectors?
22. The Great Economic Depression started in 1929 continued till 1939. what were the reasons Behind it and what was the opinion of the economists over this?
23. Interpret the given data and express your views on it?



24. Increasing Urbanisation is not just about greater opportunities for people and economy it also results in many problems. express your attitude on the consequences of Urbanization?
25. Give an account of the present status of relations between India and Pakistan?
26. Identify the colonies in 1914 with the help of a modern map of the world?



27. How do you praise the efforts put forth by constitution in promoting social justice in India?
28. Write the impact of Environment on the livelihoods of local communities?

SECTION - IV

1. Answer all the questions.

8X5 = 40

2. Each question carries 8 marks.

29. a) Into how many physiographical divisions can India be divided? what difference do you find in relief between the Himalayan region and Peninsular region?

(OR)

- b) Which areas of Andhra Pradesh have high density of population and what may be some of the reason behind it?

30. a) What are the different impacts of wars during the first half of 20th century? (AS1)

(OR)

- b) Integration of various princely states into the new Indian nation was a challenging task Discuss.

31. a) Modern farming methods require more inputs which are manufactured in industry. Do you agree? comment. (AS2)

(OR)

- b) In 1937 elections Muslim League has secured very lowest percentage of votes. But in elections conducted after 10 years Muslim League has recorded huge victory.

Question: Interpret the change that occurred in the position of Muslim League

32. a) In what ways were Jews persecuted during the Nazi Germany? do you think in every country people are differentiated because of their identity?

(OR)

National Front 1989-1990	United Front 1996-1998	National Democratic Alliance 1998-2004
Governing Parties JD; DMK; AGP; TDP ; Jammu & Kashmir National Conference (JKNC)	Governing Parties JKNC ; TDP; TMC; CPI; AGP; DMK; MGP; Samajwadi Party	Governing Parties JDU; SAD; AIADMK, JKNC; Trinamool Congress; Biju Janata Dal ; Shiva Sena ;
Supporting Parties CPM; CPI, BJP	Supporting Parties CPM	Supporting Parties TDP
<small>This is not a complete list of political parties that either supported or were part of the government. Often we have listed only those parties that had more 5 or MPs</small>		

b) Observe the table and analyze about the political parties?

33. a) Locate the following in the given map of India

- a) East Coastal Plain
- b) Capital City of Maharashtra
- c) River Brahmaputra
- d) Aravali Ranges

(OR)

b) Locate the following in the given World Map

- a) The name of country which ruled by Adolf Hitler
- b) Headquarters' city of UNO
- c) North East Country of India,
- d) Maditaranian Sea,