

**SSC PUBLIC EXAMINATION  
SOCIAL STUDIES PAPER 1 & 2  
MODEL PAPER - 1**

**TIME :3 Hrs.**

**MAX MARKS:100**

**SECTION - I**

**1. Answer all the questions.**

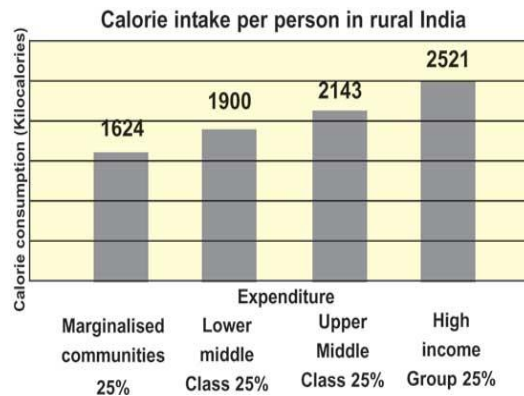
**12X1=12**

**2. Each question carries 1 mark.**

1. Name the Himalayan Rivers?
2. Define Per Capita Income?
3. The final good is?  
(a) Tire      (b) Wheel      (c) Engine      (d) Car
4. What is German Parliament called?  
(a) Lok Sabha  
(b) Duma  
(c) Reichstag  
(d) Senate
5. What is Marshal Plan?
6. What is May 4th movement?
7. Who coined the name of Pakistan?
8. In which year Constitution was adopted?

26th November 1949	Constitution was adopted
26th January 1950	Constitution came into force

9. If there are any migrated people in your area, find out the reasons for their migration?
10. Observe the bar diagram and answer the question



Question: What percentage of people in rural India is consuming more calories than required?

11. Mention the factors of Production?
12. Identify one state for a movement in the India Map relating to the Chipko movement

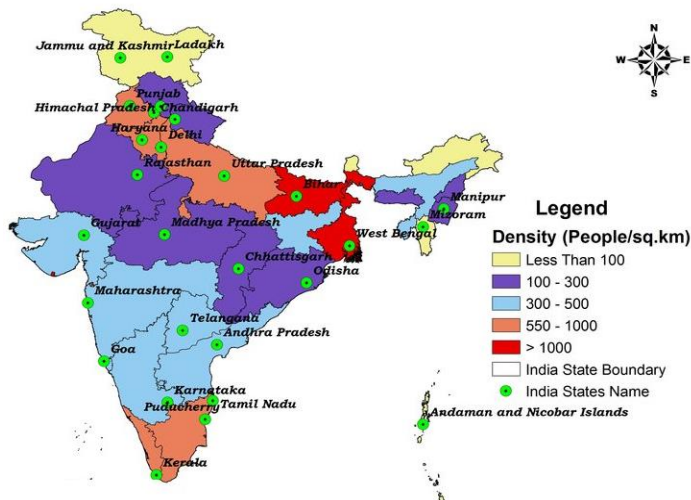


### SECTION - II

1. Answer all the questions
2. each question carries 2 marks

8X2 =16

13. In which year is RTI Act formulated? What is RTI?
14. What are collective farms?
15. Define the service sector?
16. Which state is having highest literacy rate?
17. Which qualities of Sardar Valla Bhai Patel do you appreciate?
18. Which state has the highest density of population?



19. Imagine how one would cope with a situation if millions of people were affected? Where Would you find land for resettlement? What jobs would they do?
20. The Congress was torn in its mind over the question Most congress leaders were opposed to Hitler, Mussolini and the ideas of Fascism. The congress expected that the British would See their double standards in the expectation that India should support them in fighting the Fascists but not giving full freedom.  
Question: According to you what would be the reason for and against supporting the British in the World War II?

### SECTION - III

1. Answer all the questions.
2. Each question carries 4 marks

8X4 = 32

21. Which areas of Andhra Pradesh have high density of population and what may be some of the reasons behind it?
22. After the overthrow of monarchy in China has two different types of regimes. How were they similar or different?
23. Explain the seasonal migration in your area?
24. What are the measures you suggest for improving the present public distribution system?
25. Do you think all the people of India can participate in the formulation of constitution for the entire country?
26. Locate the following places on the world map

1. USA

2. USSR

3. JAPAN

4. ENGLAND



27. As a social studies student how would you support the green peace movement?
28. Why does one appreciate organised sector a better one compared to unorganised sector?

#### SECTION - IV

**1. Answer all the questions.**

**8X5 = 40**

**2. Each question carries 8 marks**

29. a) Read the following text and write your opinion on the challenges faced by the government at the time of Independence.

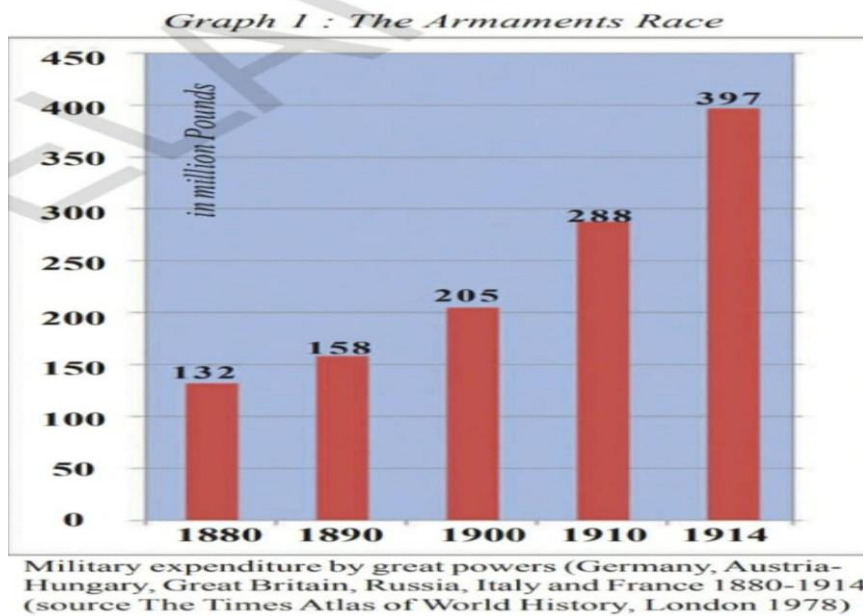
The early years of Independence is arguably the defining period in India's post independent history. The main challenges before the leadership was the need to maintain unity and integrity bring about social and economic transformation and to ensure the working of the democratic system. These challenges are inter related and great care had to be taken to ensure that the system did not get imbalanced.

**(OR)**

" This earth is not allotted to anyone nor is it presented to any one as a gift. It is awarded by providence to people who in their hearts have their courage to conquer it, the strength to preserve it and the industry to put it to the plough...A vigorous nation will always find ways of adapting its territory to its population size. "

- b) Do you think world should belong to those who have power and strength alone? Comment.
30. a) Do you think the condition of farm workers in USA, ENGLAND, FRANCE etc is similar to that of farm Labourers?

(OR)



- b) Observe the information given in the graph and write few sentences analysing it
31. a) Explain the Physical characteristics of the peninsular plateau?

(OR)

- b) What do you understand by underemployment? Explain with an example each from the urban and rural areas.
32. a) You want to reveal the results of war to the people. Write any four points which you furnish in your own made poster?

(OR)

- b) What challenges were faced by Germany during Great Depression and how did Nazi rulers and Hitler make use of it?
33. a) Locate the following in the outline Map of India.
- The triangular Plateau
  - The largest peninsular river.
  - The Prime Meridian of India

iv) Chotanagpur plateau

**(OR)**

b) Point out the following countries on the world map given.

I) China      II) Germany      III) Capital city of Italy      VI) Russia

www.sakshieducation.com