

AP GRAMA/WARD SACHIVALAYAM GRAND TEST – 1

CATEGORY I POST

MARKS : 150

No. of Questions: 150

Time : 150 Minutes

(-)tive marks: 0.25

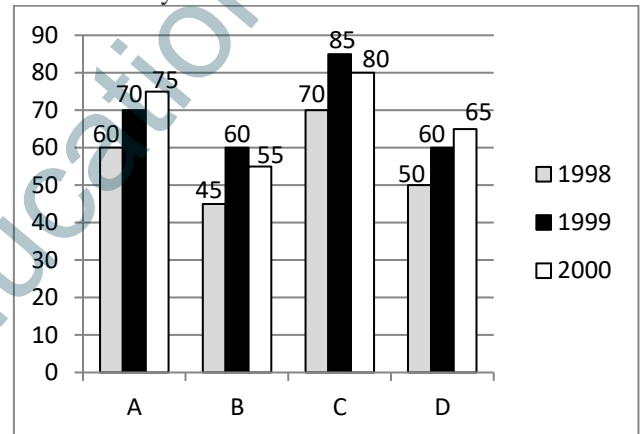
- A, B and C together can complete a piece of work in 10 days. All the three started working at it together and after 4 days A left. Then B and C together completed the work in 10 more days. A lone could complete the work in:
(a) 15 days (b) 16 days (c) 25 days (d) 50 days
- A motor boat covers a certain distance downstream in a river in 3 hours. It covers the same distance upstream in 3 and half hours. If the speed of the water is 1.5 km/h, then the speed of the boat in still water is:
(a) 17 km/hr (b) 17.5 km/h
(c) 19.5 km/h (d) 19 km/h
- The costs of two watches were in the ratio 16 : 23. The cost of first watch increases by 10% and that of second by Rs. 477. Now the costs of two watches are in the ratio 11 : 20. The price of the second watch (in Ts.) in the beginning was
(a) 932 (b) 1219 (c) 1696 (d) 848
- In a pot the ratio of milk and water is 4 : 3 and in an another pot this ratio is 9 : 1. In what ratio should the both mixtures be mixed to get a mixture of milk and water in the ratio of 3 : 2?
(a) 2 : 3 (b) 21 : 19 (c) 21 : 2 (d) 2 : 21
- Amit had a certain amount with him. He spent 20% of that to buy a car and 5% of the remaining on maintenance of a bike. Then he gifted 120 Rs. If he is left with Rs. 1400. Then find the total amount?
(a) Rs. 2000 (b) Rs. 21000
(c) Rs. 18000 (d) Rs. 15000
- In an election between two candidates, Pankaj gets 65% of the total valid votes. If the total votes were 6000, what is the number of valid votes that the other candidate Nishant gets. If 25% of the total votes were declared invalid?
(a) 1575 (b) 1567 (c) 1500 (d) 1600
- Tap 'A' can fill a tank in 10 hours. Due to leak it emptied in 15 hours. In how many hours leak alone can empty the half tank?
(a) 30 hours (b) 6 hours (c) 15 hours (d) 20 hours
- A journey of 800 km is done in a total of 10 hours, If 320 km is travel by train and remaining by bus. The same journey is done in 8 hours if 240 km is travel by train and remaining is done by bus. Find the ratio of the speed of train to bus.
(a) 2:11 (b) 3:11 (c) 1:11 (d) 4:11
- A sum of money invested for 7 years in Scheme 1 which offers SI at a rate of 8% pa. The amount received from Scheme 1 after 7 years invested for 2 years in Scheme 2 which offers CI rate of 10% pa. If the interest received from Scheme B was Rs.1638. What was the sum invested in Scheme 1?(approx)

- (a) Rs.7500 (b) Rs.5000
(c) Rs.8200 (d) Rs.9000

10. The perimeter of the top of a rectangular table is 28m, whereas its area is 48m². What is the length of its diagonal?

- (a) 5 m (b) 10 m (c) 12 m (d) 12.5 m

Directions (11-15): Study following Bar graph carefully and answer the question given below The graph represents the production of Wheat (in thousand tonnes) in four States A, B, C and D over the years



- The difference (in thousand tonnes) between the average production of wheat by four states in 1999 and average production by them state in 1998 is:
(a) 12.5 (b) 13.5 (c) 17 (d) 21.5
- Which of the given state has recorded the maximum percentage growth in production of wheat from 1999 to 2000?
(a) A (b) A and B (c) D (d) None of these
- Which of the four states has recorded the maximum percentage growth in production of wheat from 1998 to 1999?
(a) A (b) D (c) A and D both (d) None of these
- The production of wheat in state B in 1999 and production of wheat in state D in 2000 together is what percent of production by state A in 1998?
(a) 210% (b) 183.5% (c) 220.5% (d) 208.33%
- The percentage increase in production of Wheat by state B from 1998 to 1999 is:
(a) 25% (b) 30% (c) 40% (d) None of these
- There is a certain relation between two given words on one side of :: and one word is given on another side of :: while another word is to be found from the given alternatives, having the same relation with this word as the given pair has. Select the best alternative.
Canoe : Boat :: Mansion : ?
(a) Hut (b) Palace (c) House (d) Bungalow

17. Find the odd letters from the given alternatives:
(a) DEFG (b) ACDF (c) MOPQ (d) WXYZ
18. In a certain code language, "CONGO" is written as "RZPRD" and "TREAT" is written as "UQGWX". How is "PHONE" written in that code language?
(a) JNQIJ (b) KMQHK
(c) MKQKH (d) LLPIL
19. Vineet travels 16 km towards west, turns right and travels another 12 km, and then takes two successive left turns covering 8 km and 12 km in each turn respectively. Finally, he takes a right turn and travels 10km further. How far is he now from his original position?
(a) 46 km (b) 34 km (c) 40 km (d) 38 km
20. In the following question below are given some statements followed by some conclusions. Taking the given statements to be true even if they seem to be at variance from commonly known facts, read all the conclusions and then decide which of the given conclusion logically follows the given statements.

Statements:

Some pens are pencils.

All pencils are erasers.

Conclusions:

I. Some pencils are not pens.

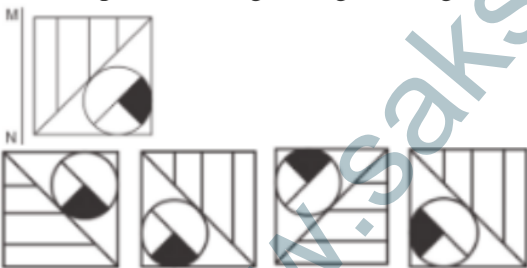
II. Some erasers are not pens.

- (a) Only conclusion (I) follows.
(b) Only conclusion (II) follows.
(c) Neither conclusion (I) nor conclusion (II) follows.
(d) Both conclusions follow.
21. Three positions of a cube are shown below. What will come opposite to face containing '4'?



- (a) 1 (b) 2 (c) 4 (d) 5

22. If a mirror is placed on the line MN, then which of the answer figures is the right image of the given figure?

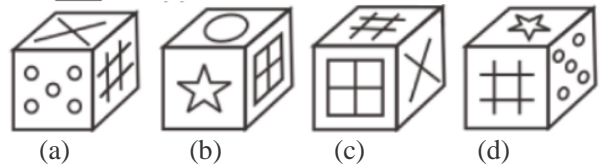



23. In a row of people Manu is 7th from bottom end of row. Shrey is 10 ranks above Manu. If Shrey is 8th from top, then how many people are there in this row?
(a) 25 (b) 26 (c) 24 (d) 23
24. How many triangles are there in the given figure?



- (a) 12 (b) 11 (c) 10 (d) 15

25. Which of the following cube in the answer figure cannot be made based on the unfolded cube in the question figure?



Direction (Q. No. 26-30) : In each of the following questions a sentence consists of a blank and it is followed by four options namely a, b, c and d. One of the options fills up the blank. Choose the appropriate option.

26. Gandhiji died _____ 1948
(a) in (b) at (c) of (d) for
27. I am _____ my book
(a) look for (b) look about
(c) looking for (d) look on
28. Children enjoy _____ coloured water at one another on the occasion of Holi.
(a) throwing (b) squirting
(c) pouring (d) spilling
29. As the pilgrims were hungry, they ate _____.
(a) instantly (b) speedily
(c) greedily (d) frequently
30. Can you tell me who were the first persons to ___ the Everest?
(a) Climbed (b) Win
(c) Victory (d) Scale

Directions (31-33): Read the following passages carefully and answer the respective questions given below each of them. Certain words/phrases/sentences have been printed in bold to help you locate them while answering some of the questions.

Passage 1 -

Once, there lived a pious Priest in a small village. He was very innocent and simple minded person, used to perform religious rituals. On one occasion, he was rewarded with a goat for his services by a wealthy man. The Priest was happy to get a goat as the reward. He happily slung the goat over his shoulder and began the journey towards his home. On the way, three cheats (Thugs) saw the Priest taking the goat.

All of them were lazy and wanted to cheat the Priest so that they could take away the goat. They said, "This goat will make a delicious meal for all of us. Let's somehow get it". They discussed the matter amongst themselves and devised a plan to get the goat by fooling the Priest. After deciding the plan, they got separated from one another and took different hiding positions at three different places on the way of the Priest.

As soon as, the Priest arrived at a lonely place, one of the cheats came out of his hiding place and asked Priest in a shocking manner, "Sir, what are you doing? I don't understand why a pious man like you needs to carry a dog

on his shoulders?" The Priest was surprised to hear such words. He screamed, "Can't you see? It's not a dog but a goat, you stupid fool". The cheat replied, "Sir, I beg your pardon. I told you what I saw. I am sorry if you don't believe it". The Priest was annoyed at the discrepancy but started his journey once again.

The Priest had barely walked a distance, when another cheat came out of his hiding place and asked the Priest, "Sir, why do you carry a dead calf on your shoulders? You seem to be a wise person. Such an act is pure stupidity on your part". The Priest yelled, "What? How can you mistake a living goat for a dead calf?" The second cheat replied, "Sir, you seem to be highly mistaken in this regard. Either you don't know how goat looks like or you are doing it knowingly. I just told you what I saw. Thank you". The second cheat went away smiling. The Priest got confused but continued to walk further.

Again the Priest had covered a little distance when the third cheat met him. The third cheat asked laughingly, "Sir, why do you carry a donkey on your shoulders? It makes you a laughing stock". Hearing the words of the third thug, the Priest became really worried. He started thinking, "Is it really not a goat? Is it some kind of a ghost?"

He thought that the animal he was carrying on his shoulders might really be some sort of ghost, because it transformed itself from the goat into a dog, from a dog into a dead calf and from dead calf into a donkey. The Priest got frightened to such an extent that he hurled the goat on the roadside and ran away. The three **tricksters** laughed at the gullible Priest. They caught the goat and were happy to feast on it.

31. Which of the following words is most SIMILAR to 'TRICKSTERS' used in the above passage?
- (a) Goons (b) cheats (c) Clowns
(d) Jokers (e) None of these
32. Which of the following is true in the context of the given passage?
- (a) The priest was unmoved by whatever the thugs said to him during his travel and kept moving forward.
(b) The thugs were very polite with their language while talking to the noble priest.
(c) The thugs wanted to take the goat away from the priest and all four of them made a full-proof plan.
(d) All (a), (b) and (c) are correct
(e) None of the above is correct.
33. Why did the thugs want to take the goat from the noble priest?
- (a) They had always wanted a goat and seeing the priest carrying a goat made them think that they can realize what they had been thinking all along.
(b) They had asked the King for a goat a fortnight ago but he rejected their request. Hence, they wanted to fulfill their desire by stealing the priest's goat.

(c) They all wanted to enjoy a delicious feast by capturing the goat.

(d) On the day before, the priest had rebuked them in front of the whole village for stealing from the village temple. So they wanted to avenge that.

(e) None of these.

Directions (Q.34-36):

ఏనుగులో బాగా ప్రసిద్ధి చెందినది దాని తొండం. అది తొండాన్ని చెట్టుబోదే చుట్టూ చుట్టి, దాని వేళ్ళతో సహా పెకలించ గలుగుతుంది.

తల్లి ఏనుగు పిల్లయేనుగును ప్రేమతో నిమరదానికి తొండాన్ని ఉపయోగిస్తుంది. ఈగలు ఏనుగును వేదిస్తే అది తొండంతో దుమ్ము తీసుకొని వీపు మీద ఊదుకుంటుంది. వాతావరణం వేడిగా ఉంటే అది తొండముతో తన శరీరంపైన నీటిని చల్లుకొంటుంది.

పని చేసేటప్పుడు అది బరువైన దులాలను ఎత్తుతుంది. వాటిని దూర స్థలాలకు కదిలిస్తుంది. ఏనుగు తొండం కండరాల సమూహం. అయితే అది మృదువుగా కూడా ఉంటుంది. ఏనుగు పోరాటంలో తొండాన్ని మెలిదిప్పి కొడుతుంది. మనం గొట్టం పుల్లతో త్రాగినట్టు ఏనుగు తొండంతో నీరు త్రాగుతుందని కొందరు భావించవచ్చు. ఇది నిజం కాదు. ఏనుగు తన తొండాన్ని నీటిని పీల్చడానికి ఉపయోగిస్తుంది. అ తర్వాత అది నీటిని నోటిలో పోసుకుంటుంది.

ప్రశ్నలు:

34.

- 34) ఏనుగు తొండం బాగా ప్రసిద్ధి చెందినది. ఎందుకంటే:
- a) దానితో ఏనుగు ఎన్నో పనుల్ని నిర్వహిస్తుంది.
b) అది పొడవైన కండరాల సమూహం
c) అది చూడడానికి అందంగా వుంటుంది
d) దానితో ఏనుగు నీటిని త్రాగగలదు, మరియు వెదజల్లగలదు.

35.

- 35) తల్లి ఏనుగు తల తొండాన్ని ఎందుకు ఉపయోగిస్తుందంటే
- a) ప్రేమను చూపటానికి
b) నీటిని వెదజల్లడానికి
c) ఈగలను పారద్రోలటానికి
d) దులాలను ఎత్తడం ఎలానో బోధించడానికి

36.

36) పోరాటంలో ఎనుగు తొందాన్ని మెలిద్రిప్పి కొడుతుంది ఎందుకంటే?

- a) యుద్ధం అంటే భయం ఉండడం వల్ల
- b) తొందం మృదువుగా ఉండడం వల్ల
- c) ఎనుగు పోరాడే విధం ఇదే కాబట్టి
- d) దాని తొందం చాలా పొడవు

37. The first computer was programmed using _____

- (a) Assembly language (b) Machine language
- (c) Spaghetti code (d) Source Code

38. Hard copy of a document is _____

- (a) printed on printer (b) stored in floppy
- (c) store in CD (d) Store in hard desk

39. Ctrl Shift and Alt are called _____ keys.

- (a) modifier (b) function
- (c) alphanumeric (d) adjustment

40. OCR Stands for _____

- (a) Optical Character Recognition
- (b) Optical CPU Recognition
- (c) Optimal Character Rendering
- (d) Other Character Restoration

41. A compiler is used to translate a program written in _____?

- (a) a low level language (b) a high level language
- (c) assembly language (d) machine language

42. Famous writer Krishna Sobti died recently. She has won which of the following awards in her life span?

- A. Jnanpith Award
- B. Sahitya Akademi Award
- C. Vyas Samman
- D. Padma Bhushan
- (a) A and C (b) B and C
- (c) A, C and D (d) A and B

43. Which country will host the annual G20 leaders' summit on 21-22 November 2020?

- (a) UAE (b) Syria (c) Qatar (d) Saudi Arabia

44. What is the theme of the Dubai World Expo 2020?

- (a) Connecting Minds, Creating the Future
- (b) Live Green, Live Better
- (c) The Emerging Society
- (d) Solutions for Tackling Humankind's Greatest Challenge

45. Who took over as Prime Minister of Britain in July 2019?

- (a) Michael Gove (b) Boris Johnson
- (c) Nigel Farage (d) Rory Stewart

46. Who is the author of the book titled 'New age technology and Industrial Revolution 4.0'?

- (a) Raushan Ganduly (b) Manoj Jha
- (c) Suresh Gopi (d) Narendra Jadhav

47. Shri B S Yediyurappa was sworn in as Chief Minister of which state in July 2019?

- (a) Karnataka (b) Kerala
- (c) Telangana (d) Tamil Nadu

48. Which country won the second edition of Intercontinental Cup football tournament?

- (a) South Korea (b) North Korea
- (c) Phillipines (d) Sri Lanka

49. Where will the 3rd Renewable Energy Investors' Meet and Expo be held?

- (a) India (b) USA (c) Russia (d) China

50. Match the following:

i. Rajrappa falls	a. Karnataka
ii. Joranda falls	b. Orissa
iii. Yenna falls	c. Jharkhand
iv. Jog falls	d. Maharashtra

- (a) i-d, ii-c, iii-b, iv-a (b) i-c, ii-d, iii-b, iv-a
- (c) i-b, ii-d, iii-c, iv-a (d) i-c, ii-b, iii-d, iv-a

51. Which among the following is the newest high court in India?

- (a) Chhattisgarh High Court
- (b) Andhra Pradesh High Court
- (c) Jharkhand High Court (d) Manipur High Court

52. What is the toll free number of Spandhana?

- (a) 1800-425-4440 (b) 1800-524-3330
- (c) 1800-524-2220 (d) 1800-625-5550

53. On which date farmer day was celebrated in Andhra Pradesh?

- (a) July 8th (b) June 8th (c) Aug 8th (d) May 8th

54. Rajanna Badi bata started from which date to date?

- (a) July 14th to 17th (b) June 14th to 17th
- (c) Aug 14th to 17th (d) Sep 14th to 17th

55. What is the scheme name of Mid Day meals program in Government school?

- (a) Y. S. R. Akshaya Patra (b) Rajanna Canteen
- (c) N.T. R Canteen (d) None of the above

56. How much financial assistant provided to the farmer on the name of Y.S. R. Rythu Barosa

- (a) 14500 (b) 13500 (c) 6000 (d) 12500

57. To measure the UV rays which of the following glass was used?

- (a) glass manufactured quartz
- (b) glass manufactured Plint
- (c) glass manufactured soda
- (d) glass manufactured pyrox

58. In which country more magnetic reserves are located

- (a) Australia (b) Turkey (c) North Sweden
- (d) China

59. Integrated Circuits are manufactured with

- (a) Silver (b) Silicon (c) Iron (d) Nickel

60. Fourth state of matter is called as

- (a) Solid (b) Liquid (c) gases (d) Plasma

61. Which of the following was filled in atmospheric balloons

- (a) Helion (b) Neon (c) Oxygen (d) Florine

62. Which of the following gas is used in ammonia

- (a) Oxygen (b) Nitrogen (c) Chlorine (d) Helium

63. Genetics deals with

- (a) Mendel's law (b) Organic evolution
- (c) DNA Structure (d) Heredity and variations

64. Dinosaurs were

- (a) Cenozoic reptiles (b) Mesozoic birds
- (c) Paleozoic amphibians (d) Mesozoic reptiles

65. Poison gland of snakes is homologous to
 (a) Electric organ of fishes (b) stings of rays
 (c) sebaceous glands of mammals
 (d) salivary gland of vertebrates
66. The food conducting tissue of a plants is
 (a) Phloem (b) Xylem (c) Parenchyma
 (d) Collenchyma
67. Which of the following is an egg laying mammal?
 (a) Bat (b) Leafy- Ant eater (c) Whale
 (d) Spiny Ant- eater
68. Which of the following Asian Countries is declared as 'Malaria free' by WHO recently?
 (a) Sri Lanka (b) Pakistan
 (c) Nepal (d) Bangladesh
69. In the 4G cell phones, LTE technology is used. What does LTE indicate?
 (a) Long term evolution
 (b) Lightening technology engineering
 (c) Local telecom evolution
 (d) Liberal tuning evolution
70. The ministry of science and Technology has recently launched a new programme called "SATYAM". Its main object is to
 (a) Conduct lie detector tests in all the courts in India.
 (b) Link ancient wisdom to modern knowledge
 (c) Protect the intellectual property rights in India
 (d) Strengthen research in the areas of Yoga and meditation
71. The particle BOSON is named after two scientists. One of them is Einstein. The Name of the other Indian scientist is
 (a) Satyendranath Bose (b) Lokendranath Bose
 (c) Sarathchandra Bose (d) Jagadish Chandra Bose
72. Government of India identified how many wet lands in India?
 (a) 26 (b) 115 (c) 217 (d) 278
73. Which of the following protocol tell about bio diversity conservation
 (a) Nagoya Protocol (b) Cartagena Protocol
 (c) Kaulalampur Protocol (d) Kanakan Protocol
74. How many aichi targets identify under the biodiversity
 (a) 10 (b) 17 (c) 20 (d) 24
75. National River protected scheme selected which of the following river from Andhra?
 (a) Penna (b) vamshadhara (c) Nagavali
 (d) None of the above

PART - B

76. Identity the lake which is mentioned in the Pithapuram inscription of Prithvisvara of Velanadu
 (a) Chilka Lake (b) Pulicat Lake
 (c) Kolleru Lake (d) Pakala Lake
77. The Raichur Doab is formed by the Confluence of Rivers
 (a) Krishna and Tungabhadra
 (b) Tunga and Bhadra
 (c) Krishna and Godavari (d) Kagna and Krishna
78. Which of the following is a old stone age site
 (a) Keesarapalli (b) Billa sorgam
 (c) Utnoor (d) Revarala
79. Which of the following places is an evidence of Chalcolithic age in Andhra
 (a) Sanganakallu (b) Tekkala Kota
 (c) Palavoy (d) Patapadu
80. Which literature refers to Andhras as 'Andhakaratta'
 (a) Vedic literature (b) Buddhist literature
 (c) Jain literature (d) Taitareya brahmana
81. Who among the following located Satavahanas in Ballari (Bellary) district on the basis of Myakadoni Inscription
 (a) V.V. Mirashi (b) R.G. Bhandarker
 (c) V.S Sukthankar (d) S.A. Joglekar
82. Name the capital of a place known as "Anupa" under Goutami Putra Satakarni?
 (a) Mahishmati (b) Vidisha
 (c) Ujjain (d) Podana
83. Who among the following issued Junnar Inscription
 (a) Bhoomaka (b) Chastana
 (c) Ushavadatta (d) Aayama
84. Identity the Inscription of Chanda Satakarni
 (a) Kanheri Inscription (b) Kodavali Inscription
 (c) Amaravathi Inscription (d) Karle Inscription
85. Which Ikshvaku ruler was described as 'Sri Paryatadhipati'
 (a) Shantamula I (b) Shantamula II
 (c) Virapurusha Datta (d) Rudra Purusha Datta
86. Rudrapurushadatta issued which of the following Inscriptions
 (a) Gurazala Inscription (b) Jaggayyapeta Inscription
 (c) Vijayapuri Inscription
 (d) Sriparvata Inscription
87. The inscription at which place records multiple gifts to different sections and institutions by the ruler
 (a) Karle (b) Veerapuram
 (c) Ramagiri (d) Alluru
88. Which inscription mentions Ushavadatta investing 2,000 Karshapanas in a weaver's guild at Govardhana
 (a) Sopara inscription (b) Nasik inscription
 (c) Kanheri inscription (d) Pratistan inscription
89. Which of the following texts contained writing by the women
 (a) Brihatkatha (b) Kamasutra
 (c) Gatha Saptasati (d) Lilavati
90. The text "Yogasara" was written by
 (a) Nagarjuna (b) Dhanapala
 (c) Konda Kundacharya (d) Vastupala
91. Which Eastern Chalukyan ruler issued Vipparla inscription
 (a) Kubja Vishnu Vardhana (b) Khananjaya
 (c) Jayasimha Vallabha (d) Shakti Varma

92. Who among the following rulers used the title 'Trinamra Martya Maheshwara'?
- (a) Vishnu Vardhana I (b) Vijayaditya I
(c) Vishnu Vardhana III (d) Gunaga Vijayaditya
93. During Eastern Chalukyan time, Potla cheruvu was a popular centre for
- (a) Buddhism (b) Jainism
(c) Saivism (d) Vaishnavism
94. Identify the person who received Nandampudi Village as a grant from Rajaraja Narendra
- (a) Nannayya Bhatt (b) Narayana Bhatt
(c) Jina Vallabha (d) Pavuluri Mallana
95. Which inscription mentioned about Kakatiyas for the first time
- (a) Magallu inscription
(b) Bayyaram inscription
(c) Polavaram inscription
(d) Pillalamarri inscription
96. The following expenditure shall be charged on the consolidated fund of India, except
- (a) Debt charges for which the government of India is liable
(b) Salaries, allowances and pensions payable to or in respect of Supreme Court judges
(c) The pensions payable to or in respect of judges of any high court
(d) The pensions payable to or in respect of governors of any state
97. Regarding the money bill all of the following are correct, except
- (a) whether a bill is money bill or not the decision of the speaker of the Lok Sabha shall be final
(b) after the speaker's certificate on money bill, it shall not be open to question either in a court of law or in either house or even by the president
(c) money bills shall be introduced in Lok Sabha only
(d) president may return money bill for reconsideration
98. All following statements regarding the privileges of Parliament members are correct except
- (a) Freedom from arrest
(b) Freedom of attendance as witness
(c) Freedom of speech
(d) Members individual freedom only allowed, house as a whole do not have freedom
99. Article 17 and 18 provide
- (a) Social equality (b) Economic Equality
(c) Political Equality (d) Religious Equality
100. Which one of the following is a fundamental right under the constitution of India and a human right as well
- (a) Right to information (b) Right to education
(c) Right to die (d) Right to housing
101. In which of the following cases did the Supreme Court direct the compulsory registration of all marriages in India
- (a) Daniel Lafifi vs Union of India
(b) Ashok Kumar vs Union of India
(c) Seema vs Ashwin Kumar
(d) Sharada vs Dharam Paul
102. Which of the following states has more than one member of Parliament in the Lok Sabha
- (a) Meghalaya (b) Nagaland
(c) Sikkim (d) Mizoram
103. How many state in India re Bicameral in their governance structure
- (a) 5 (b) 6 (c) 7 (d) 4
104. Preamble to the constitution of India promised citizens to provide justice. Choose the correct combination of words used in the preamble for which justice is sought to the be secured
- (a) Social, Religious and Political
(b) Economic, Religious and Political
(c) Social, Economic and Political
(d) Social, Economic and Natural
105. Which one among the following has the power to regulate the right of citizenship in India?
- (a) The union cabinet (b) The Parliament
(c) The supreme court (d) Law commission
106. While calculating inflation, if prices of commodities which are volatile are not taken into consideration, such inflation is known as
- (a) headline inflation (b) core inflation
(c) mild inflation (d) food inflation
107. Prices in India increase mainly not because of
- (a) Indiscriminate increase in public expectations
(b) Hoarding of essential commodities
(c) Oil price shocks
(d) Less agricultural production
108. The control inflation
- (a) it may be sufficient to use monetary policy
(b) fiscal policy measures would alone be sufficient
(c) inflation should be targeted aggressively
(d) a combination of monetary, fiscal and exchange rate policies may be required
109. The expert committee to review and strengthen the monetary policy framework, in recent times was headed by
- (a) N. Vaghul (b) SS Tarapore
(c) Urjit Patel (d) Aravind Panagaria

- 110.** Which of the following is not a part of the organized sector of the Indian money market?
- Money market mutual funds
 - Certificate of deposits
 - Finance companies
 - Treasury bills
- 111.** Which of the following is not a part of unregulated non-bank financial intermediaries?
- commercial and trade bills
 - indigenous bankers
 - loan companies
 - money lenders
- 112.** Which of the following institutions does not participate in the organized sector of the Indian money market?
- discount and finance house of India
 - SEBI
 - commercial banks
 - mutual funds
- 113.** Repo rates are money market instruments which are used
- to stabilize the economy
 - to control unaccounted money transactions
 - to regulate liquidity in the economy
 - to help the government to meet to short-term credit needs
- 114.** The Banking Regulation Act 1949 gave extensive regulatory powers to
- State Bank of India
 - Government of India
 - Reserve Bank of India
 - All Nationalized Banks
- 115.** A regional rural bank
- is a subsidiary of a public sector bank
 - meets the credit requirements of the public like any commercial bank
 - is opened in all parts and regions of India
 - has been successful in terms of operational viability
- 116.** Base rate of interest
- The actual lending rate charged by banks
 - The actual lending rate plus borrower specific charges
 - The minimum rate for all loans without any exceptions
 - The rate which is allowed to vary according to the conditions prevailing in the money market
- 117.** In Indian Reserve money does not consist of
- only currency with public
 - only bankers deposits as reserves with the RBI
 - other deposits with the RBI

- 118.** Gilt edged market deals with
- Corporate securities only
 - Government securities as well as those guaranteed by the government
 - corporate bonds only
 - certificates of deposits issued by the commercial banks
- 119.** An example of all India Development Finance institutions is
- Small Industries Development Bank of India (SIDBI)
 - EXIM Bank
 - UTI
 - Export credit and guarantee corporation of India (ECGCI)
- 120.** Which of the following statements is true?
- As on 2013-14, Direct taxes accounted for less than half of the total tax revenue of the Central Government
 - Of all the taxes levied by the centre, corporate tax is the most important one in terms of revenue generation
 - Income tax has played a crucial and positive role in income redistribution in rural India
 - GST is not related to income
- 121.** Match the following List I with List II (Northern hemisphere) and choose the correct answer.
- | List I | List II |
|---------------------|-------------------|
| a. Winter solstice | I. December, 22 |
| b. Summer solstice | II. June, 21 |
| c. Vernal equinox | III. March, 21 |
| d. Autumnal equinox | IV. September, 23 |
- Codes:**
- | a | b | c | d |
|--------|-----|-----|-----|
| (a) IV | III | II | I |
| (b) I | II | III | IV |
| (c) I | II | IV | III |
| (d) IV | II | III | I |
- 122.** The boundary between crust and mantle is _____ discontinuity.
- Gutenberg
 - Moho
 - Conrad
 - Sues
- 123.** The bottom topography of an Ocean can be shown by
- Hydrostatic curve
 - Altimetric curve
 - Hypsometric curve
 - Holometric curve
- 124.** Yellowstone National Park which is famous for geysers/hot springs is located in
- Canada
 - USA
 - New Zealand
 - Australia

- 125.** Which one among the following is a Volcanic Mountain?
 (a) Mt. Blanc (b) Mt. Everest
 (c) Mt. Louis (d) Mt. Etna
- 126.** Which one of the following lakes is not part of the Great lakes of North America?
 (a) Erie (b) Victoria
 (c) Huron (d) Ontario
- 127.** Consider the following two statements and choose the appropriate answer:
 (A) Gorges and Canyons represent V-shaped valleys.
 (B) Gorges are the extended forms of Canyons.
 (a) Only A is correct (b) Only B is correct
 (c) Both A and B are correct
 (d) Neither A nor B are correct
- 128.** Arrange the following constituents (in terms of their quantity) in the atmosphere in descending order:
 (a) Nitrogen, Oxygen, Argon, CO₂
 (b) Nitrogen, CO₂, Argon, Oxygen
 (c) Nitrogen, Oxygen, CO₂, Argon
 (d) Argon, CO₂, Nitrogen, Oxygen
- 129.** Which of the following statement's rightly explain/s about tropopause?
 i) Seasonal variation occurs in the height of tropopause ?
 ii) It is the transition zone between troposphere and stratosphere.
 iii) It lies below the stratosphere
 (a) (ii) and (iii) (b) (i) and (ii)
 (c) (i), (ii) and (iii) (d) (i) and (iii)
- 130.** Wind in the northern hemisphere is deflected towards right due to
 (a) Rotation of the Earth (b) Temperature variations
 (c) Presence of higher land surface
 (d) Shape of the continents
- 131.** Doldrums extend on both sides of
 (a) Tropic of Cancer (b) Tropic of Capricorn
 (c) Arctic Circle (d) Equator
- 132.** The Suez Canal connects
 (a) Baltic Sea and Pacific Ocean
 (b) Mediterranean Sea and Atlantic Ocean
 (c) Baltic Sea and Mediterranean Sea
 (d) Mediterranean Sea and Red Sea
- 133.** Which of the following is not a warm ocean current?
 (a) Agulhas Current (b) Humboldt Current
 (c) Brazil Current (d) Kuroshio Current
- 134.** Which among the following has the highest albedo?
 (a) Snow (b) Water (c) Sand (d) Grass
- 135.** Zulu tribes are found in
 (a) Australia (b) New Zealand
 (c) Egypt (d) South Africa

136. Match the following:

List I (Crops)

- A. Barley
 B. Groundnut
 C. Ragi
 D. Rice

List II (Chief Producer)

- I. Karnataka
 II. Uttar Pradesh
 III. Gujarat
 IV. West Bengal

Code:

- | A | B | C | D |
|---------|-----|-----|----|
| (a) I | II | III | IV |
| (b) II | III | I | IV |
| (c) IV | III | II | I |
| (d) III | IV | II | I |

- 137.** Which one of the following Islamic countries is predominantly of Shia sect?
 (a) Iraq (b) Iran
 (c) Pakistan (d) Afghanistan
- 138.** Karaganda basin is famous for
 (a) Iron (b) Petroleum
 (c) Coal (d) manganese
- 139.** Danube river flows into
 (a) Baltic Sea (b) Black Sea
 (c) North Sea (d) Mediterranean Sea
- 140.** The 'Hottentots' are
 (a) Pygmies of Congo basin
 (b) Negritos of Sri Lanka having brown colour
 (c) Nomadic pastoralists of South Africa
 (d) Negritos of Northern-Africa
- 141.** Which section of the Andhra Pradesh Reorganization Act, 2014 specifies the territory remaining with the residual State of Andhra Pradesh?
 (a) section 3 (b) section 4
 (c) section 5 (d) section 6
- 142.** Which section of the AP Reorganization Act, 2014 permits continuance of officers in the same post in which they were working earlier, even after reorganization?
 (a) Section 78 (b) Section 79
 (c) Section 80 (d) Section 81
- 143.** Which section of the AP Reorganization Act, 2014 determine the manner of division of assets of Public Sector Undertakings?
 (a) Section 51 (b) Section 52
 (c) Section 53 (d) Section 54
- 144.** Which section of the Andhra Pradesh Reorganization Act, 2014 was amended by the Andhra Pradesh Reorganization Amendment Ordinance, 2014 which is popularly known as Polavaram Ordinance Bill?
 (a) Section 1 (b) Section 2 (c) Section 3
 (d) Section 4
- 145.** As per section 26 of the Andhra Pradesh Reorganization Act, 2014, the Assembly constituencies in Andhra Pradesh can be increased through delimitation from the present number of 175 to
 (a) 200 (b) 225 (c) 250 (d) 275

146. As per the Andhra Pradesh Reorganization Act, 2014, which caste is deleted from the list pertaining to Andhra Pradesh in the Constitution (Scheduled Castes) Order, 1950?

- (a) Beda (Budga) Jangam (b) Bavuri
(c) Bariki (d) Bindla

147. APSFC is listed in which Schedule of the Andhra Pradesh Reorganization Act, 2014?

- (a) 7th Schedule (b) 8th Schedule
(c) 9th Schedule (d) 10th Schedule

148. Which is the 'Appointed Day' mentioned in the Andhra Pradesh Reorganization Act, 2014?

- (a) 2nd June, 2014 (b) 4th March, 2014

149. How many mandals have been alienated from Telangana and annexed to Andhra Pradesh during reorganization due to their submergence issues under the Polavaram Project?

- (a) 5 (b) 6 (c) 7 (d) 9

150. After reorganization, what is the position of Andhra Pradesh in terms of meeting targets laid down under FRBM?

- (a) The targets are under control
(b) The targets could not be met
(c) The targets are lowered
(d) Correct data is not available

***** ALL THE BEST *****

www.sakshieducation.com
AP GRAMA/WARD SACHIVALAYAM
CATEGORY I POST GRAND TEST - 1 ANSWER KEY

1	c	21	a	41	b	61	a	81	c	101	c	121	b	141	b
2	c	22	d	42	d	62	b	82	a	102	a	122	b	142	b
3	b	23	c	43	d	63	d	83	d	103	b	123	c	143	c
4	c	24	b	44	a	64	d	84	b	104	c	124	d	144	c
5	a	25	c	45	b	65	d	85	c	105	b	125	b	145	b
6	a	26	a	46	d	66	a	86	a	106	b	126	c	146	a
7	c	27	c	47	a	67	d	87	d	107	d	127	b	147	c
8	c	28	b	48	b	68	a	88	b	108	d	128	a	148	a
9	b	29	c	49	a	69	a	89	c	109	c	129	d	149	c
10	b	30	d	50	d	70	d	90	a	110	c	130	b	150	b
11	a	31	b	51	b	71	a	91	c	111	a	131	a		
12	c	32	c	52	a	72	b	92	d	112	b	132	d		
13	d	33	c	53	a	73	c	93	b	113	c	133	b		
14	d	34	a	54	b	74	d	94	b	114	c	134	a		
15	d	35	a	55	a	75	c	95	a	115	a	135	d		
16	c	36	c	56	d	76	c	96	d	116	b	136	b		
17	d	37	b	57	a	77	a	97	d	117	b	137	b		
18	b	38	a	58	c	78	b	98	d	118	b	138	c		
19	b	39	a	59	b	79	d	99	a	119	a	139	b		
20	c	40	a	60	d	80	b	100	b	120	d	140	c		