

This Question Paper contains 4 Printed Pages.

22E(A)

SOCIAL STUDIES, Paper - II

(English version)

Parts A and B

Time : 2 hrs. 45 min.]

[Maximum Marks : 40

Instructions :

- (1) 15 minutes is allocated to read the question paper and 2.30 hours is allocated to write answers.
 - (2) Answer the questions under **Part 'A'** on a separate sheet.
 - (3) Write the answers to the questions under **Part 'B'** on the question paper itself and attach it to the answer book of **Part 'A'**.
 - (4) Attach the given outline map of **World** with the answer book of **Part 'A'**.
-

Part - A

Time : 2.00 hrs.

Marks : 30

SECTION - I

4×1=4

NOTE : (i) Answer **all** the following questions.

(ii) Each question carries **ONE** mark.

1. What were the main challenges before the leaders of the country in early years after Independence ?
2. Write any two objectives of U.N.O.
3. Write down the ill effects of reckless oil extraction in Nigeria.
4. Write two slogans on the necessity of peace.

22E(A)

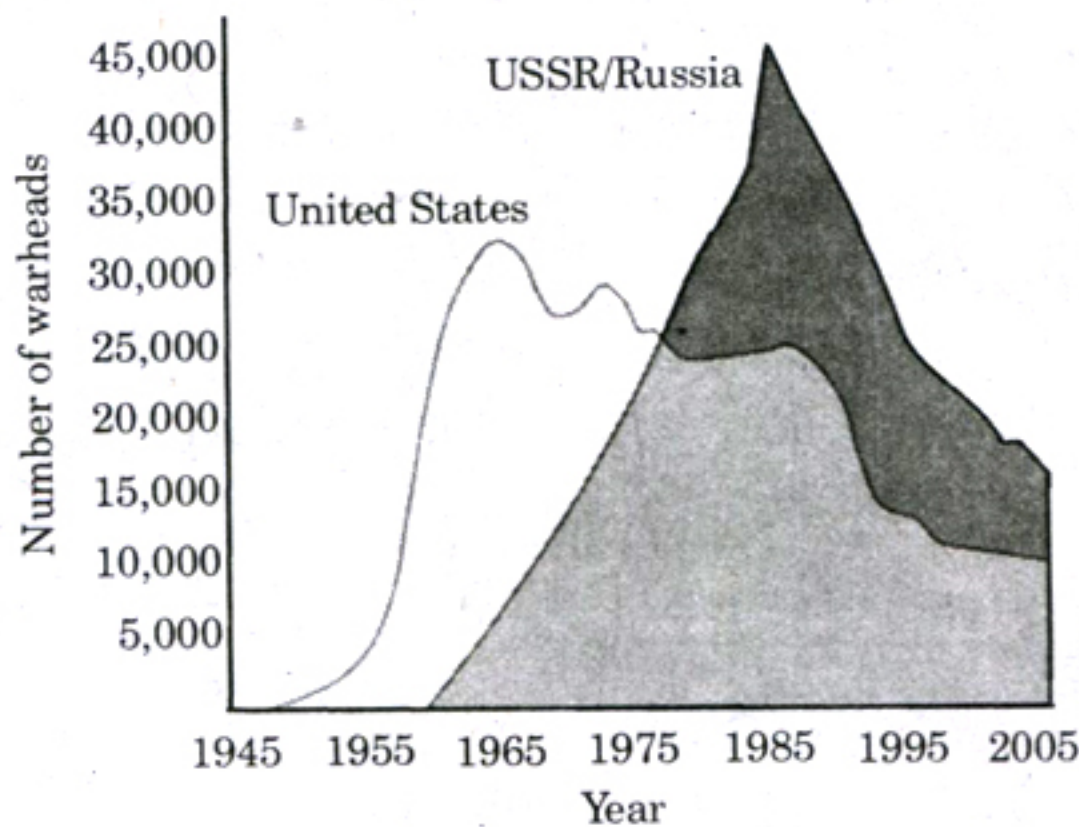
V

SECTION - II

5×2=10

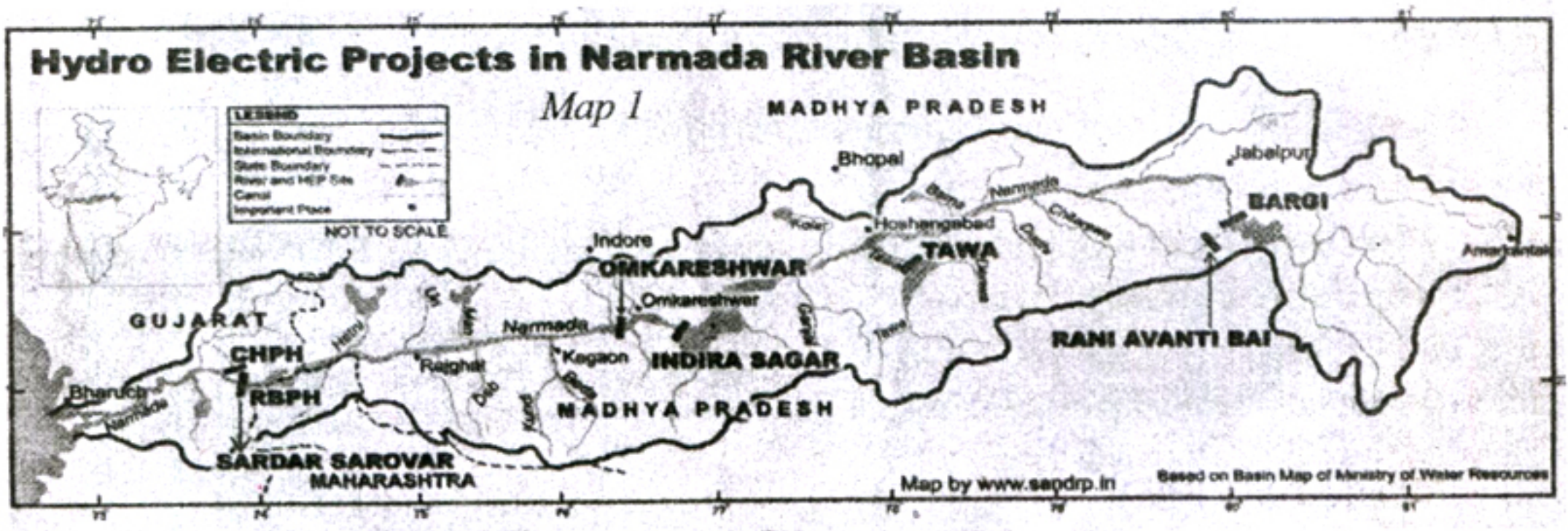
NOTE : (i) Answer **all** the following questions.
(ii) Each question carries **TWO** marks.

5. "Constitution is a living and changing document." Would you agree with it? Justify it.
6. How did the education system in Vietnam contribute to the emergence of nationalist ideas?
7. Analyse the below graph and write your observations.



Graph: US and USSR nuclear stockpiles

8. Read the map given below and answer the following questions.



- (i) In which state, was Sardar Sarovar Project constructed?
- (ii) Name the movement that was held against the construction of dams on river Narmada.

9. "Coalition Governments cause political instability." Comment.

SECTION - III

4×4=16

- NOTE :** (i) Answer **all** the following questions.
(ii) Each question carries **FOUR** marks.

10. (A) "Right to Information Act resembles the true spirit of Democracy". Explain.

OR

- (B) What steps both India and China should take to build lasting peace between the two countries?

11. (A) Explain the rise of Nazism in Germany.

OR

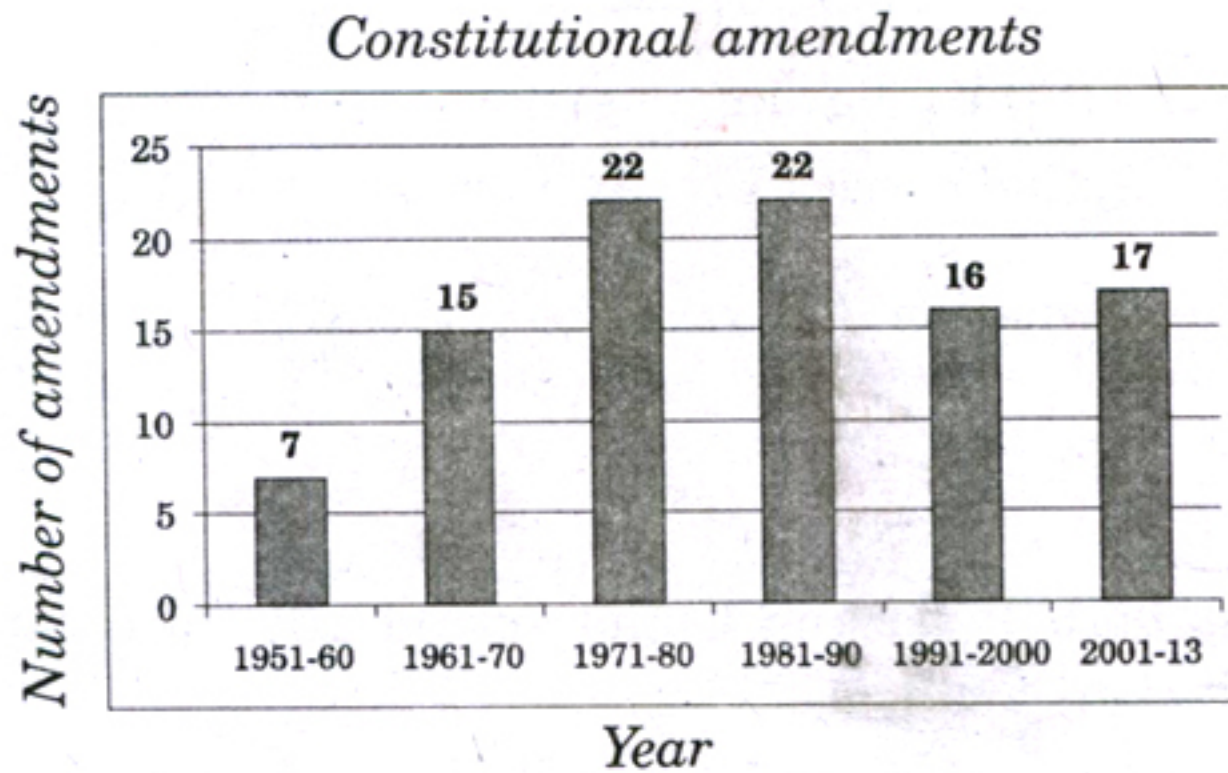
- (B) Estimate the pros and cons of building Multipurpose projects.

12. (A) Answer the questions with the help of Time-line chart.

- (a) What was the immediate cause for the Second World war ?
- (b) When did the United States enter into the World war II ?
- (c) The Weimar Republic belongs to which country ?
- (d) Write any two important incidents occurred in 1941.

Proclamation of the Weimar Republic	• Nov. 9, 1918
Hitler becomes chancellor of Germany.	• January 30, 1933
Germany invades Poland. Beginning of the Second World War.	• Sep. 1, 1939
Germany invades the USSR.	• June 22, 1941
Mass murder of the Jews begins.	• June 23, 1941
The United States joins Second World War.	• Dec 8, 1941
Soviet troops liberate Auschwitz	• Jan 27, 1945
Allied victory in Europe.	• May 8, 1945

OR

OR**(B)** Answer the following questions based on the below graph.

- (a) When did the Constitution come into force ?
- (b) In which decade, the least number of amendments had done ?
- (c) Why does the Constitution need to be amended ?
- (d) How many Constitutional amendments had been done from 1951 to 1980 ?

13. Point out the following in a given map of **World**.

- (A)** (a) The city in which the head-quarters of International Court of Justice is situated.
- (b) The capital city of England.
- (c) The country that was called as Dutch East Indies.
- (d) The country of Danzing port.

OR

- (B)** (1) Beijing
- (2) North Korea
- (3) Italy
- (4) Alaska