

This Question Paper contains 4 Printed Pages.

21E(A)

SOCIAL STUDIES, Paper - I

(English version)

Parts A and B

Time : 2 hours 45 min.]

[Maximum Marks : 40

Instructions :

1. In the time duration of 2 hours 45 minutes, 15 minutes of time is exclusively allotted to read and understand the question paper.
2. Answer the questions under **Part-A** on separate answer sheet.
3. Attach the given outline map of India with the answer sheet of **Part-A**.

Part - A

Time : 2.00 hours

Marks : 35

Note :

1. Answer **all** the questions from the given **three** sections I, II and III of **Part-A**.
2. In section - III, every question has internal choice.

SECTION - I

Note :

7×1=7 marks

- (i) Answer **all** the questions.
- (ii) Each question carries **ONE** mark.
- (iii) Answer each question in 1 or 2 sentences.

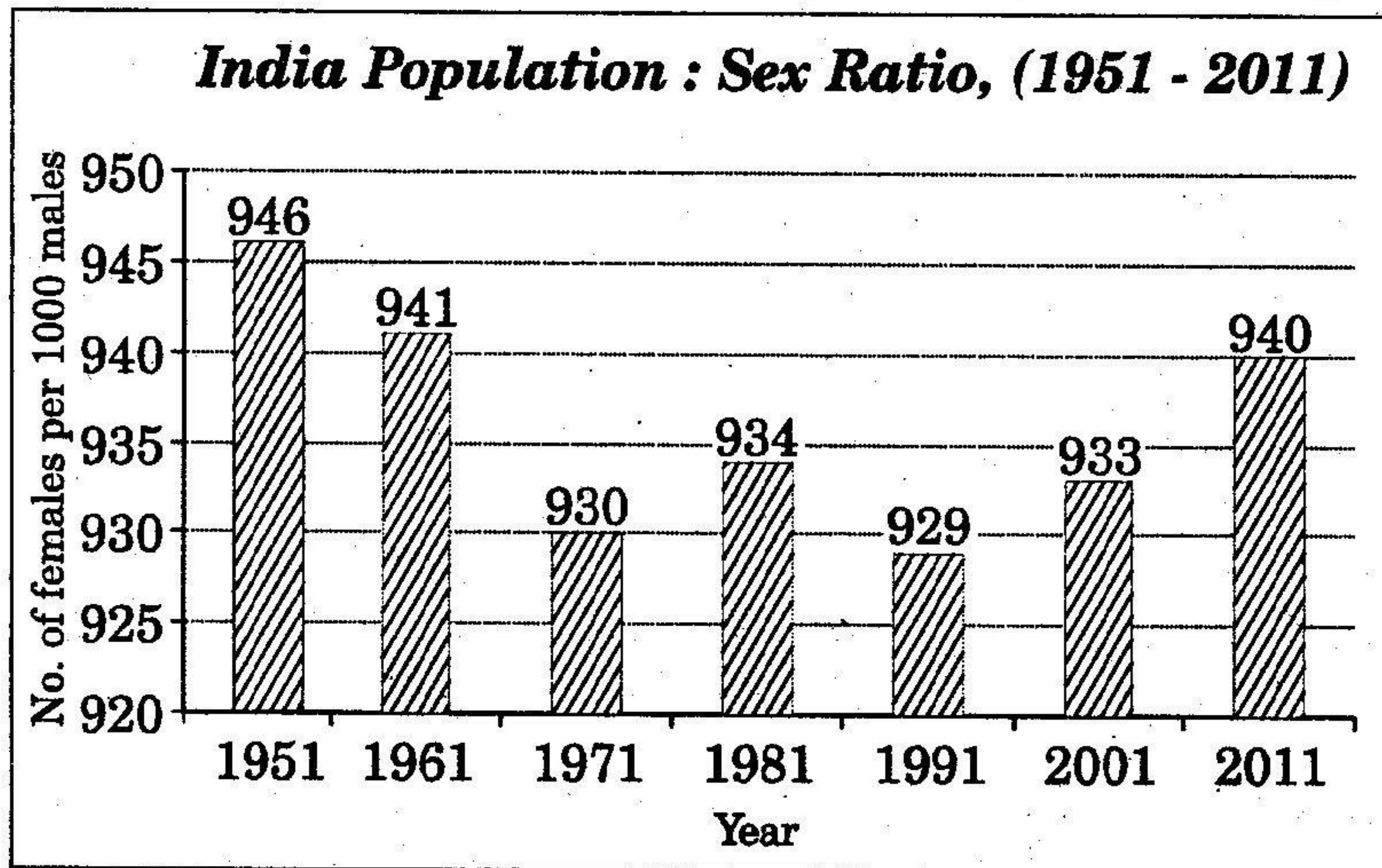
1. Write down the reason for the low temperature in India in the months of December and January.

21E(A)

T

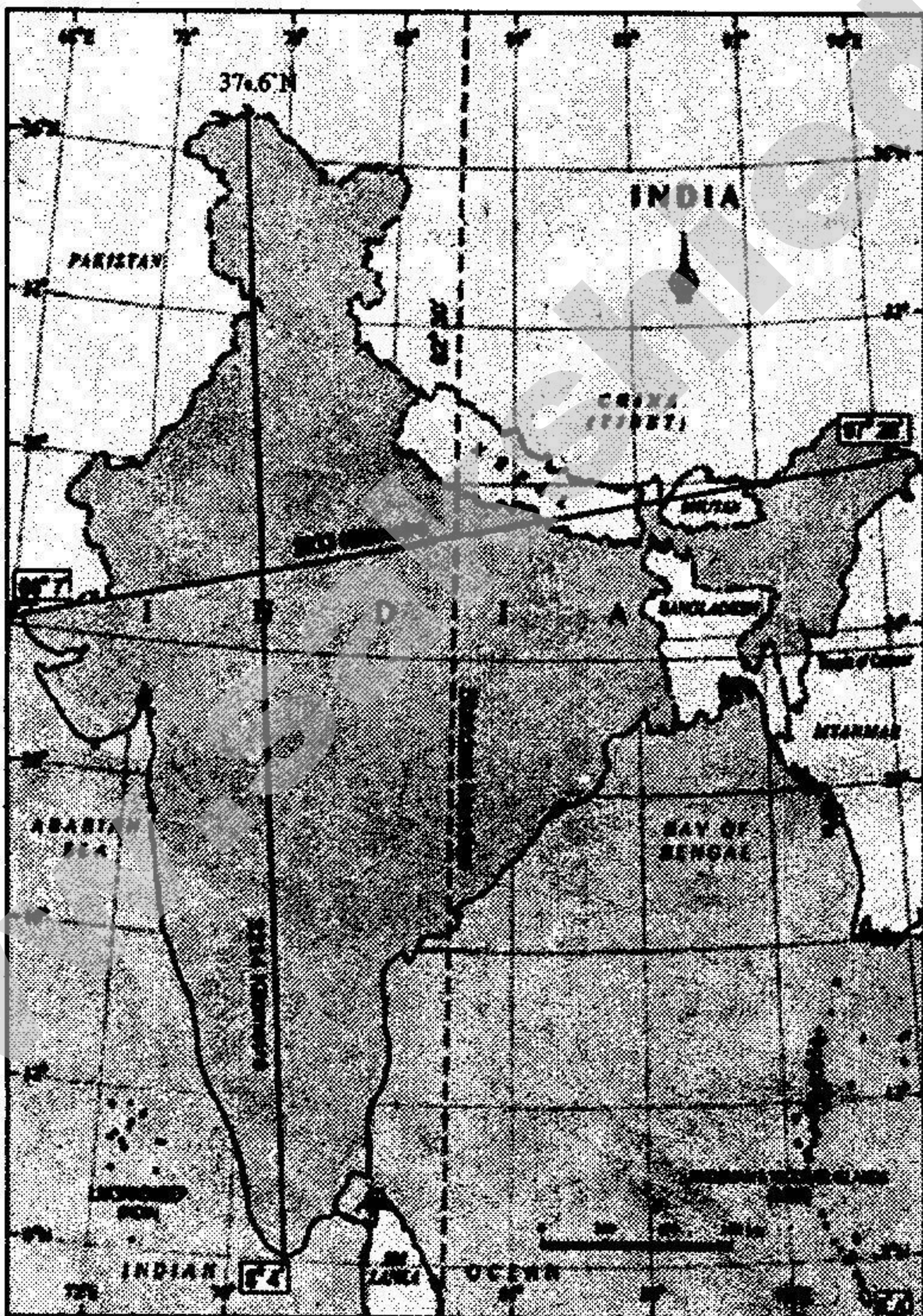
P.T.O.

Observe the given bar graph and answer the questions 2, 3, 4, 5.



2. What does the above graph tell about ?
3. What does the change in sex ratio show when compared with 1991 year to that of 2011 year ?
4. What do you mean by sex ratio ?
5. Mention the reason behind the low female population in India.

* Read the map given and answer the questions 6 and 7.



Map : India - north-south, east-west extent and standard meridian

6. Name the latitude that divides India into two parts.
7. On which longitude, is Indian Standard Time based upon ?

21E(A)

T


SECTION - II

6×2=12 marks

- Note :** (i) Each question carries **TWO** marks.
(ii) Answer each question in 4-5 sentences.

8. Observe the given graph and analyse it.

Shares of different sectors in Gross Domestic Product



- A - Agriculture
 B - Industry
 C - Trade, hotels, transport and communications.
 D - Finance, insurance, real estate.
 E - Community, social and personal services.

9. Give four reasons to the factors that helped Globalisation.
 10. Create any two slogans to prevent Global warming.
 11. Identify the importance of environment in the development of a nation.
 12. Analyse the problems of Urbanisation.
 13. Name the facilities enjoyed by the workers in the organised sector.

SECTION - III

4×4=16 marks

- Note :** (i) Each question carries **FOUR** marks.
 (ii) There is an internal choice to each question.
 (iii) Answer each question in 8 to 10 sentences.
 (iv) Answer the question no. 17 in the given map of India.

14. Write down the advantages and disadvantages of the people when they migrate.

OR

Explain the use of water in the river basin of Tungabhadra.

21E(A)

T

P.T.O.

15. How can flexibility in labour laws support the present companies ?

OR

How far is 'Food Security' required today in India ?

16. Read the given paragraph and comment.

In many parts of the country, girls' education is still given less priority by the parents as compared to boys' education. While girls may study for a few years, they may not complete their schooling.

OR

Read the given paragraph and interpret.

Labour being the most abundant factor of production, it would be ideal if the new ways of farming used much more labour. Unfortunately, such a thing has not happened. The use of labour on farms is limited. The labour, looking for opportunities is thus migrating to neighbouring villages, towns and cities. Some labour has entered the non-farm sector in the village.

17. Locate the following in the given map of **India**.

- (a) A peninsular river
- (b) Mumbai
- (c) Himalayan mountains
- (d) Circar coast

OR

- (a) Vindhya mountains
 - (b) Chennai
 - (c) One summer resort
 - (d) Arunachal Pradesh
-