

# HEIGHTS AND DISTANCES

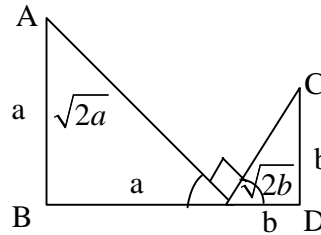
## PREVIOUS EAMCET BITS

1. P is a point on the segment joining the feet of two vertical poles of heights a and b. The angles of elevation of the tops of the poles from P are  $45^\circ$  each. Then the square of the distance between the tops of the poles is **[EAMCET 2009]**

- 1)  $\frac{a^2 + b^2}{2}$       2)  $a^2 + b^2$       3)  $2(a^2 + b^2)$       4)  $4(a^2 + b^2)$

Ans: 3

Sol.  $AC^2 = (\sqrt{2}a)^2 + (\sqrt{2}b)^2$   
 $2(a^2 + b^2)$

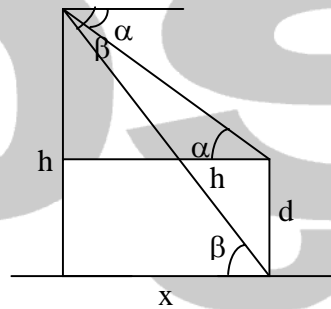


2. From the top of the hill h meters high the angles of depressions of the top and the bottom of a pillar are  $\alpha$  and  $\beta$  respectively. The height (in metres) of the pillar is **[EAMCET 2008]**

- 1)  $\frac{h(\tan \beta - \tan \alpha)}{\tan \beta}$     2)  $\frac{h(\tan \alpha - \tan \beta)}{\tan \alpha}$     3)  $\frac{h(\tan \beta + \tan \alpha)}{\tan \beta}$     4)  $\frac{h(\tan \beta + \tan \alpha)}{\tan \alpha}$

Ans: 1

Sol.  $x = h \cot \beta, x = (h - d) \cot \alpha$   
 $\Rightarrow h \cot \beta = (h - d) \cot \alpha$   
 $\Rightarrow h \tan \alpha = (h - d) \tan \beta$   
 $\Rightarrow d \tan \beta = h(\tan \beta - \tan \alpha)$   
 $\Rightarrow d = h \frac{(\tan \beta - \tan \alpha)}{\tan \beta}$

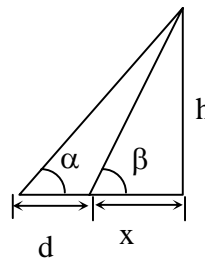


3. The angle of elevation of an object from a point P on the level ground is  $\alpha$ . Moving d metres on the ground towards the object, the angle of elevation is found to be  $\beta$ . Then the height (in metres) of the object is **[EAMCET 2007]**

- 1)  $d \tan \alpha$       2)  $d \tan \beta$       3)  $\frac{d}{\cot \alpha + \cot \beta}$       4)  $\frac{d}{\cot \alpha - \cot \beta}$

Ans: 4

Sol.  $h \cot \alpha = d + x$   
 $h \cot \beta = x$   
 $d = h(\cot \alpha + \cot \beta)$   
 $\therefore h = \frac{d}{\cot \alpha - \cot \beta}$



4. The locus of the point  $z = x + iy$  satisfying the equation  $\left| \frac{z-1}{z+1} \right| = 1$  is given by **[EAMCET 2006]**

- 1)  $x = 0$                       2)  $y = 0$                       3)  $x = y$                       4)  $x + y = 0$

Ans: 1

Sol.  $|z-1|^2 = |z+1|^2$

$$(x-1)^2 + y^2 = (x+1)^2 + y^2$$

$$\Rightarrow 4x = 0 \Rightarrow x = 0$$

5. The product of the distinct  $(2n)^{\text{th}}$  roots of  $1+i\sqrt{3}$  is equal to

[EAMCET 2006]

- 1) 0                      2)  $-1-i\sqrt{3}$                       3)  $1+i\sqrt{3}$                       4)  $-1+i\sqrt{3}$

Ans: 2

Sol. by substitution method put  $n = 1$

$$\text{Then } (1+i\sqrt{3})^{\frac{1}{2}} = \left( 2 \left( \frac{1}{2} + i \frac{\sqrt{3}}{2} \right) \right)^{\frac{1}{2}} = 2^{\frac{1}{2}} \left( \text{cis } \frac{\pi}{3} \right)^{\frac{1}{2}}$$

$$= 2^{\frac{1}{2}} \text{cis} \left( 2k\pi + \frac{\pi}{3} \right)^{\frac{1}{2}}$$

$$\text{If } k = 0, \alpha_1 = 2^{\frac{1}{2}} \text{cis} \frac{\pi}{6}$$

$$k = 1, \alpha_2 = 2^{1/2} \text{cis} \left( \pi + \frac{\pi}{6} \right) = 2^{1/2} \text{cis} \frac{7\pi}{6}$$

$$\text{Product of roots } \alpha_1 \alpha_2 = 2^{1/2} 2^{1/2} \text{cis} \frac{\pi}{6} \cdot \text{cis} \left( \frac{7\pi}{6} \right)$$

$$= 2 \text{cis} \left( \frac{\pi}{6} + \frac{7\pi}{6} \right)$$

$$= 2 \text{cis} \frac{8\pi}{6} = 2 \text{cis} \left( \frac{4\pi}{3} \right)$$

$$= -1 - i\sqrt{3}$$

6. A tower, of  $x$  meters high, has a Flagstaff at its top. The tower and the Flagstaff subtend equal angle at a point distant  $y$  metres from the foot of the tower. Then the length of the Flagstaff in metres is

[EAMCET 2005]

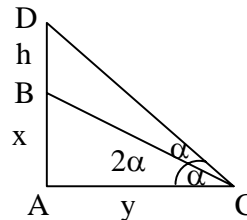
- 1)  $\frac{y(x^2 - y^2)}{(x^2 + y^2)}$                       2)  $\frac{x(y^2 + x^2)}{(y^2 - x^2)}$                       3)  $\frac{x(x^2 + y^2)}{(x^2 - y^2)}$                       4)  $\frac{x(x^2 - y^2)}{(x^2 + y^2)}$

Ans: 2

Sol.  $\tan 2\alpha = \frac{x+h}{y}, \tan \alpha = \frac{x}{y}$

Use  $\tan(2\alpha)$  formula

$$\text{Then } h = \frac{x(y^2 + x^2)}{(y^2 - x^2)}$$



7. An aeroplane flying with uniform speed horizontally one kilometer above the ground is observed at an elevation of  $60^\circ$ . After 10 seconds if the elevation is observed to be  $30^\circ$ , then the speed of the plane (in km/hr) is

[EAMCET 2004]

- 1)  $\frac{240}{\sqrt{3}}$                       2)  $200\sqrt{3}$                       3)  $240\sqrt{3}$                       4)  $\frac{120}{\sqrt{3}}$

Ans: 3

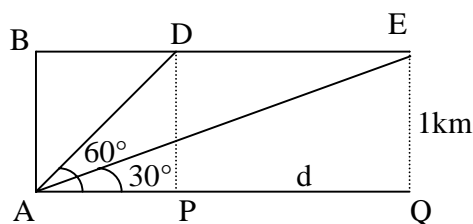
Sol. In  $\triangle APD \Rightarrow \tan 60^\circ = \frac{1}{AP} \Rightarrow AP = \frac{1}{\sqrt{3}}$

$\Rightarrow AP + PQ = \sqrt{3}$

$PQ = \sqrt{3} - \frac{1}{\sqrt{3}} = \frac{2}{\sqrt{3}} \text{ km}$

$10 \text{ sec} - \frac{2}{\sqrt{3}} \text{ km}$

$1 \text{ hr} - \frac{2}{\sqrt{3}} \times \frac{3600}{10} = 240\sqrt{3} \text{ km/hr}$



8. A tower subtends angles,  $\alpha$ ,  $2\alpha$  and  $3\alpha$  respectively at points A, B and C, all lying on a horizontal line through the foot of the tower. Then  $\frac{AB}{BC} = \dots\dots$  [EAMCET 2003]

1)  $\frac{\sin 3\alpha}{\sin 2\alpha}$

2)  $1 + 2 \cos 2\alpha$

3)  $2 \cos 2\alpha$

4)  $\frac{\sin 2\alpha}{\sin \alpha}$

Ans: 2

Sol. Let height of the tower  $OP = h$

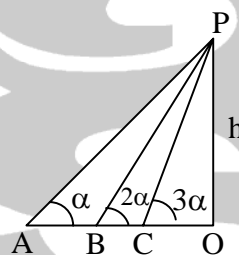
$AB = OA - OB = h(\cot \alpha - \cot 2\alpha)$

$BC = OB - OC = h(\cot 2\alpha - \cot 3\alpha)$

$\frac{AB}{BC} = \frac{\cot \alpha - \cot 2\alpha}{\cot 2\alpha - \cot 3\alpha}$

$= \frac{\cos \alpha \sin 2\alpha - \cos 2\alpha \sin \alpha}{\sin \alpha \sin 2\alpha} \times \frac{\sin 2\alpha \cdot \sin 3\alpha}{\cos 2\alpha \sin 3\alpha - \cos 3\alpha \sin 2\alpha}$

$= \frac{\sin 3\alpha}{\sin \alpha} = 1 + 2 \cos 2\alpha$



9. From a point on the level ground, the angle of elevation of the top of a pole is  $30^\circ$ . On moving 20 mts nearer, the angle of elevation is  $45^\circ$ . Then the height of the pole in mts is [EAMCET 2002]

1)  $10(\sqrt{3} - 1)$

2)  $10(\sqrt{3} + 1)$

3) 15

4) 20

Ans: 2

Sol.  $\tan 30^\circ = \frac{h}{h + 20}$

$\Rightarrow h = 10(\sqrt{3} + 1)$

10. The shadow of the two standing on a level ground is found to be 60 metres longer when the sun's altitude is  $30^\circ$  than when it is  $45^\circ$ . The height of the tower is [EAMCET 2001]

1) 60 m

2) 30 m

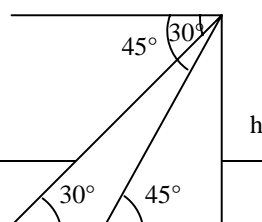
3)  $60\sqrt{3}$  m

4)  $30(\sqrt{3} + 1)$  m

Ans: 4

Sol.  $h = \frac{60}{\cot 30^\circ - \cot 45^\circ}$

$h = \frac{60}{\sqrt{3} - 1} = 30(\sqrt{3} + 1)$



60mt

11. If two towers of height  $h_1$  and  $h_2$  subtend angles  $60^\circ$  and  $30^\circ$  respectively at the midpoint of the line joining their feet, then  $h_1 : h_2 =$  **[EAMCET 2000]**  
1) 1 : 2                      2) 1 : 3                      3) 2 : 1                      4) 3 : 1

Ans: 4

Sol.  $h_1 : h_2 = \tan \alpha : \tan \beta$   
 $= \tan 60^\circ : \tan 30^\circ$   
 $= 3 : 1$



నాస్